


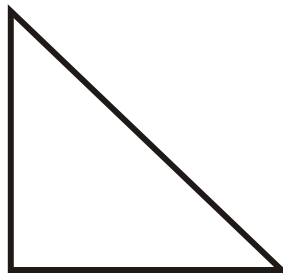
Identify the polygons.

1)



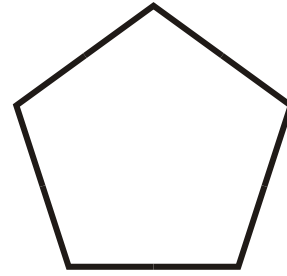
Isosceles Triangle

2)



Right Triangle

3)




Regular Pentagon

4)



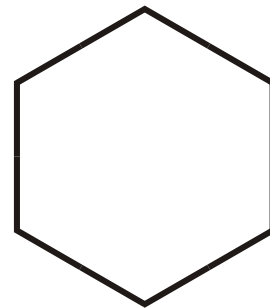
Parallelogram

5)



Square

6)



Regular Hexagon

7)



Rectangle

8)




Scalene Triangle

9)



Trapezoid

10)



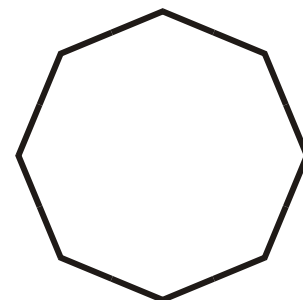
Equilateral Triangle

11)



Rhombus

12)



Regular Octagon