

What are the names of the following angles.

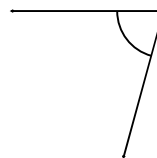
1)



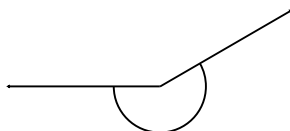
2)



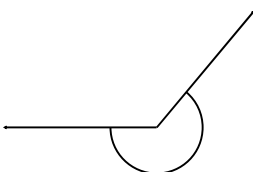
3)



4)



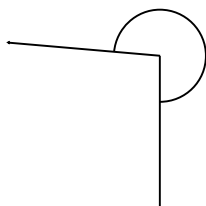
5)



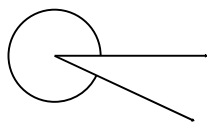
6)



7)



8)



9)



10)



11)



12)

