

What are the names of the following angles.

1)



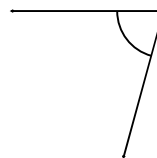
Acute

2)



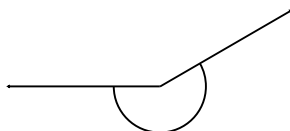
Obtuse

3)



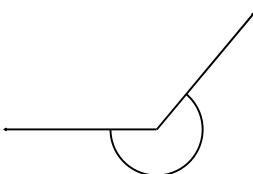
Acute

4)



Reflex

5)



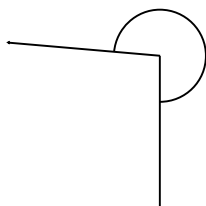
Reflex

6)



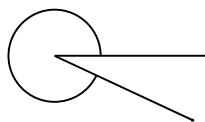
Reflex

7)



Reflex

8)



Reflex

9)



Obtuse

10)




Obtuse

11)



Reflex

12)



Reflex